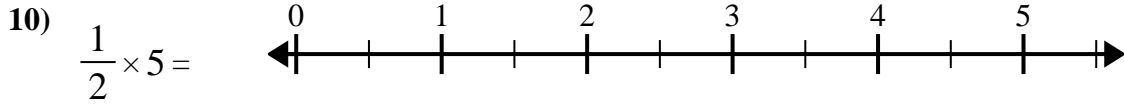
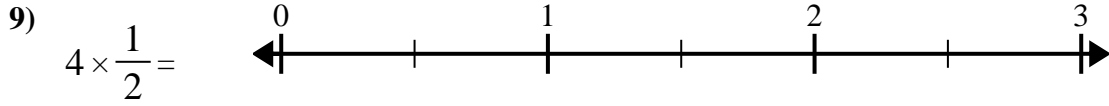
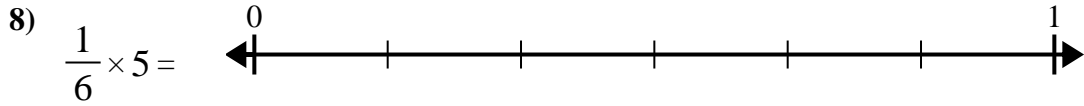
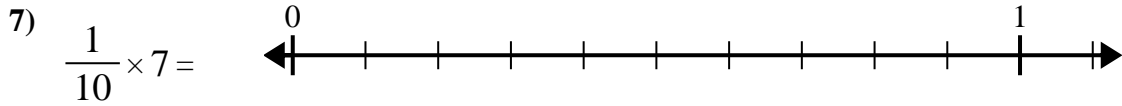
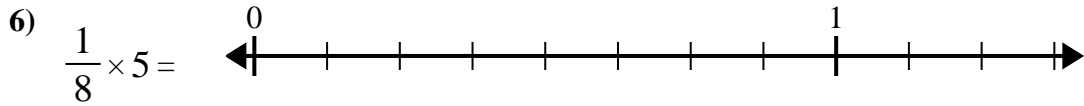
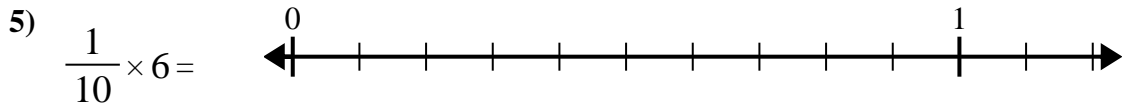
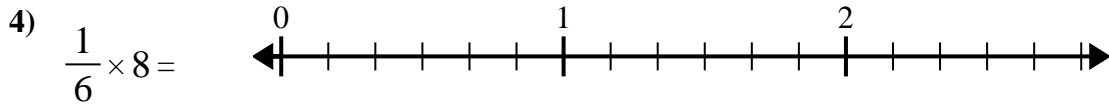
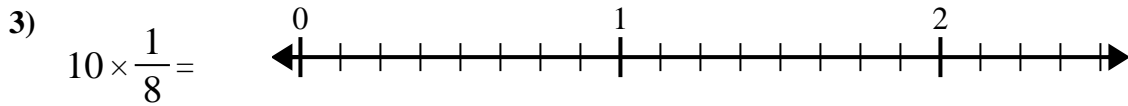
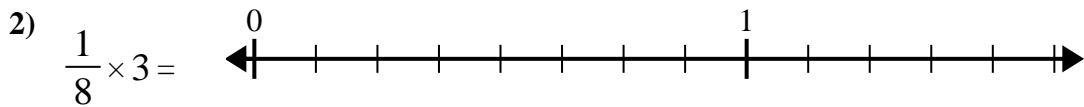
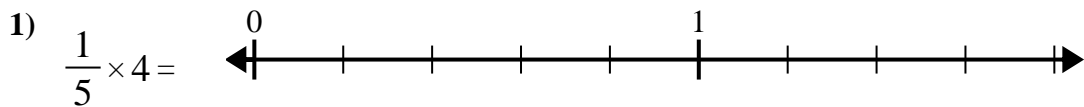




Use the numberline to solve.

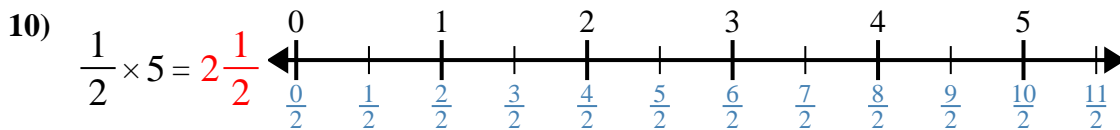
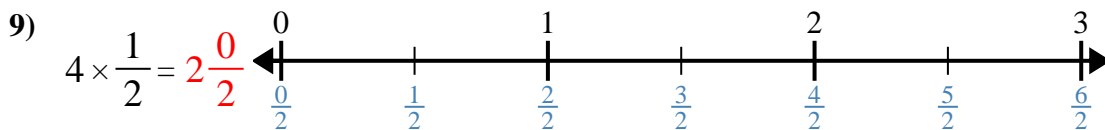
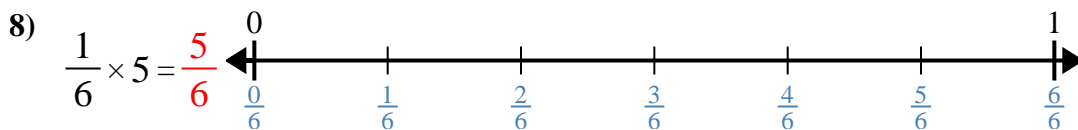
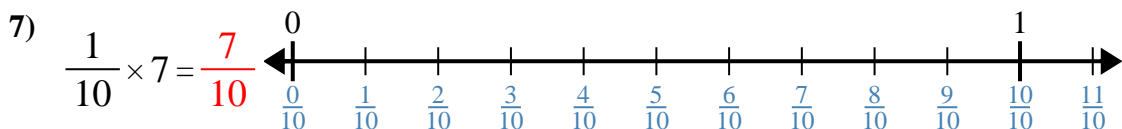
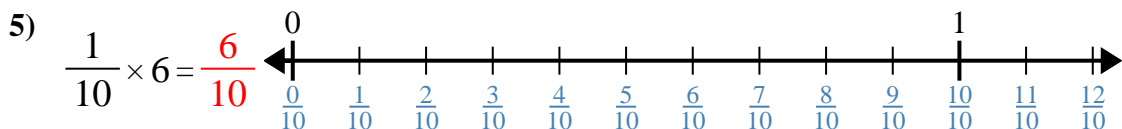
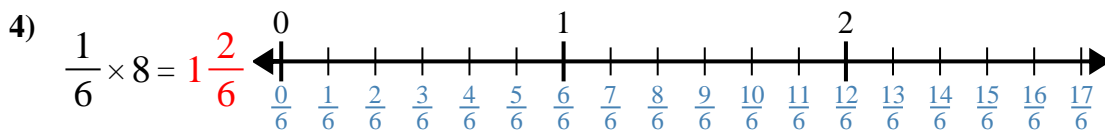
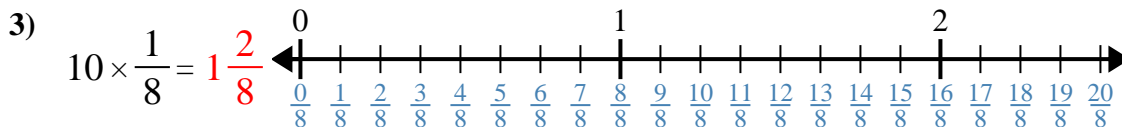
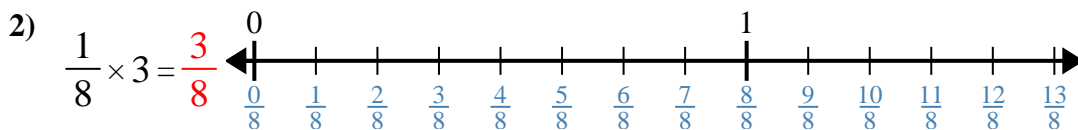
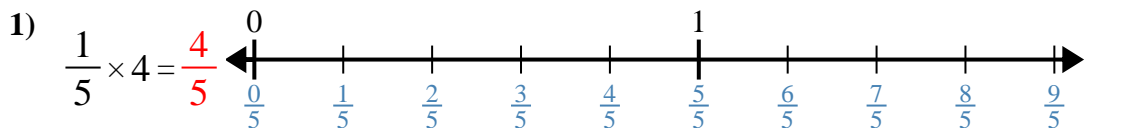


**Answers**

1. \_\_\_\_\_
2. \_\_\_\_\_
3. \_\_\_\_\_
4. \_\_\_\_\_
5. \_\_\_\_\_
6. \_\_\_\_\_
7. \_\_\_\_\_
8. \_\_\_\_\_
9. \_\_\_\_\_
10. \_\_\_\_\_



Use the numberline to solve.



Answers

1.  $\frac{4}{5}$

2.  $\frac{3}{8}$

3.  $1\frac{2}{8}$

4.  $1\frac{2}{6}$

5.  $\frac{6}{10}$

6.  $\frac{5}{8}$

7.  $\frac{7}{10}$

8.  $\frac{5}{6}$

9.  $2\frac{0}{2}$

10.  $2\frac{1}{2}$



Use the numberline to solve.

$2\frac{1}{2}$

$\frac{5}{6}$

$1\frac{2}{8}$

$\frac{5}{8}$

$\frac{4}{5}$

$2\frac{0}{2}$

$\frac{7}{10}$

$\frac{3}{8}$

$1\frac{2}{6}$

$\frac{6}{10}$

**Answers**

1)

1. \_\_\_\_\_

2)

2. \_\_\_\_\_

3)

3. \_\_\_\_\_

4)

4. \_\_\_\_\_

5)

5. \_\_\_\_\_

6)

6. \_\_\_\_\_

7)

7. \_\_\_\_\_

8)

8. \_\_\_\_\_

9)

9. \_\_\_\_\_

10)

10. \_\_\_\_\_